


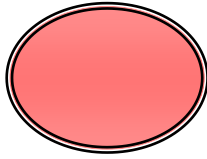
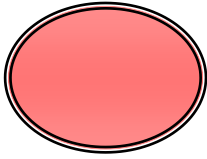
ورقة عمل للصف الثالث الابتدائي

حل المسألة :


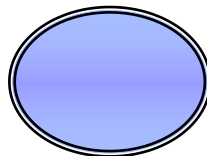
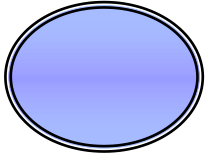
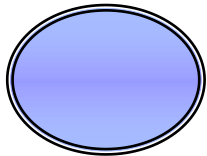
❖ مع سالم 15 قلما يراد توزيعهم على 3 تلاميذ. كم نصيب كل تلميذ؟

❖ في المكتبة 24 كتابا يراد تقسيم على 6 أرفف ؟

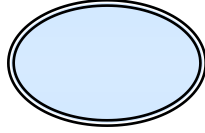
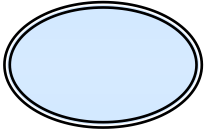
أكمل ما يلي :



= $2 \div 12$




= $3 \div 6$



$$\square = \square \div \square$$

$$\square = \square \div \square$$



أكمل الناقص :

$$\square = 6 \div 12$$

$$\square = 3 \div 9$$

$$\square = 5 \div 10$$

$$\boxed{} = 7 \div 14$$

$$\boxed{} = 4 \div 8$$

$$\boxed{} = 5 \div 20$$