

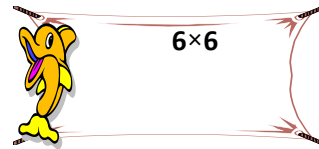
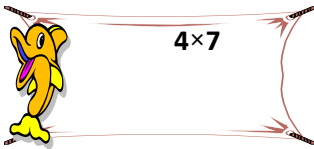
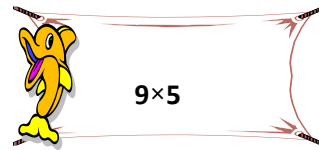
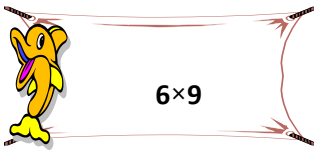
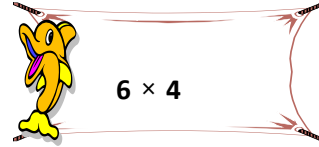
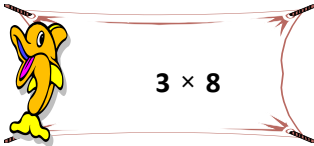
أكمل الجدول

6	×
36	
	8
	1

	×
18	3
	5
18	

6	×
	7
24	
	9

ضع رمز العلاقة المناسبة:



أكتب رمز العدد الناقص

$$48 = 8 \times \text{Egg}$$

$$64 = \text{Egg} \times \text{Egg}$$

$$72 = \text{Egg} \times 8$$

$$\text{Egg} \times 40 = \text{Egg} \times 5$$

أكملي مضاعفات العدد 8

